

**O. P. JINDAL SCHOOL, SAVITRI NAGAR**  
**Annual Examination - (2022 – 2023)**

**Class / Section: I ( )**  
**Subject: Mathematics**

**MM: 40**  
**Time: 2 Hrs. 15 min.**

Name: \_\_\_\_\_

Roll No.: \_\_\_\_\_

Invigilator Sign: \_\_\_\_\_ Marks Obtained: \_\_\_\_\_

Examiner Sign: \_\_\_\_\_

**(Fifteen Minutes Extra will be given for reading the Question Paper.)**

**General Instructions: All questions are compulsory.**

**1) Fill in the blanks :**

**(5Marks)**

i) 7 tens 5 ones = \_\_\_\_\_. (number formed)

ii) Ninety one = \_\_\_\_\_ (write number)





iii) 56 \_\_\_\_\_ 76 (put <, > or =)

iv) 43 \_\_\_\_\_ (write after number)

v)  $69 - 1 =$  \_\_\_\_\_

**2) Match it :**

**(4Marks)**

	<p>₹ 5</p>
	<p>₹ 100</p>
	<p>₹ 20</p>
	<p>₹ 10</p>

3) Solve :

$$\begin{array}{r} 3 \\ + 4 \\ \hline \end{array}$$

$$\begin{array}{r} 6 \\ + 4 \\ \hline \end{array}$$

$$\begin{array}{r} 6 \\ + 1 \\ \hline \end{array}$$

$$\begin{array}{r} 4 \\ + 6 \\ \hline \end{array}$$

$$\begin{array}{r} 7 \\ + 7 \\ \hline \end{array}$$

$$\begin{array}{r} 7 \\ + 5 \\ \hline \end{array}$$

$$\begin{array}{r} 1 \\ + 2 \\ \hline \end{array}$$

$$\begin{array}{r} 5 \\ - 3 \\ \hline \end{array}$$

$$\begin{array}{r} 7 \\ - 7 \\ \hline \end{array}$$

(5Marks)

$$\begin{array}{r} 4 \\ + 3 \\ \hline \end{array}$$

$$\begin{array}{r} 3 \\ - 2 \\ \hline \end{array}$$

4) Word problems:

(4 Marks)

i) A plant had 78 leaves . Insects ate away 23 leaves . How many leaves were left?

ii) A man buys 30 red roses and 36 white roses . How many roses does he buy?

5) Tick(✓) the correct option :

(5Marks)

i) There are \_\_\_\_\_ days in a week.

- a) 12            b) 7            c) 24

ii) \_\_\_\_\_ is the seventh month of the year.

- a) August        b) July        c) June

iii) \_\_\_\_\_ comes before Tuesday.

- a) Monday      b) Friday      c) Sunday

iv) Rs 3 is same as \_\_\_\_\_ 50p coin .


- a) 6            b) 4            c) 5

v) \_\_\_\_\_ is the last month of the year .

- a) December    b) January    c) November

6) Look at these pencils and compare their length :

(3Marks)



i) Pencil A is shorter than pencil \_\_\_\_\_ .

ii) Pencil \_\_\_\_\_ is the longest.

iii) Pencil \_\_\_\_\_ is the shortest.

7) Circle the smaller number :

(2Marks)

i) 78 , 88

ii) 32 , 56

\*\*\*\*\*

- i) 57 , 64      ii) 43 , 33      iii) 58 , 49

11) Circle the greater number : (3Marks)

v) January is the first month of the year. \_\_\_\_\_

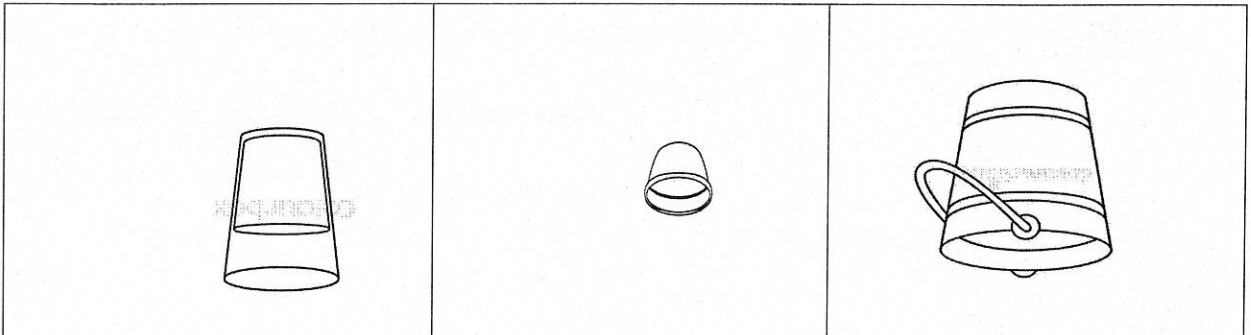
iv)  $66 - 6 = 60$  \_\_\_\_\_

iii)  $80 + 0 = 95$  \_\_\_\_\_

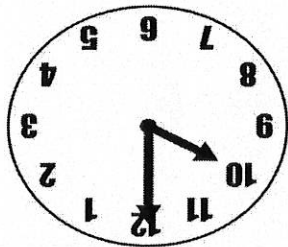
ii) Friday comes after Thursday. \_\_\_\_\_

i)  $Rs\ 4 + Rs\ 4 = Rs\ 6$  \_\_\_\_\_

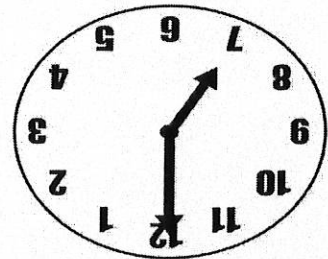
10) Write true or false : (5Marks)



9) Circle the one that can hold less water and cross the one that can hold more water: (2Marks)



(2Marks)



8) Write the time :